

AGA KHAN UNIVERSITY EXAMINATION BOARD

SECONDARY SCHOOL CERTIFICATE

CLASS IX


ANNUAL EXAMINATIONS (THEORY) 2023

Art and Model Drawing Paper I

Time: 30 minutes Marks: 20

INSTRUCTIONS


1. Read each question carefully.
2. Answer the questions on the separate answer sheet provided. DO NOT write your answers on the question paper.
3. There are 100 answer numbers on the answer sheet. Use answer numbers 1 to 20 only.
4. In each question, there are four choices A, B, C, D. Choose ONE. On the answer grid, black out the circle for your choice with a pencil as shown below.



Candidate's Signature

5. If you want to change your answer, ERASE the first answer completely with a rubber, before blacking out a new circle.
6. DO NOT write anything in the answer grid. The computer only records what is in the circles.

1. The image which exemplifies applied art is



2. The form of art in which materials are used to produce three-dimensional art objects is known as

- A. performing art.
- B. sculpture.
- C. drawing.
- D. painting.

3. Which of the following is NOT a function of art?

- A. Proving a fact
- B. Telling stories
- C. Preserving history
- D. Expressing emotions

4. Mariam is drawing a sketch on a fabric which she has to deliver to her customer as early as possible.

In this situation, the medium of drawing she should use is

- A. crayons.
- B. acrylic paints.
- C. graphite pencil.
- D. charcoal pencil.

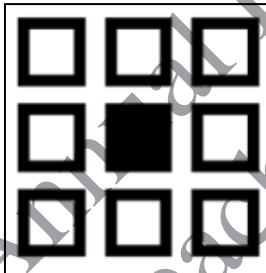
5. The element of design that is used to define the edges of an object is
- A. line.
 - B. form.
 - C. shape.
 - D. texture.

6. The factor of difference between one point and two point perspective is the
- A. vanishing point.
 - B. volume.
 - C. shape.
 - D. hue.

7. The element of art that refers to the areas within a picture is
- A. form.
 - B. value.
 - C. shape.
 - D. space.

8. The natural texture that can be used to design an artwork is a
- A. fence.
 - B. mosaic tile.
 - C. plastic leaf.
 - D. cracked pavement.

9. The principle of design depicted in the given image is



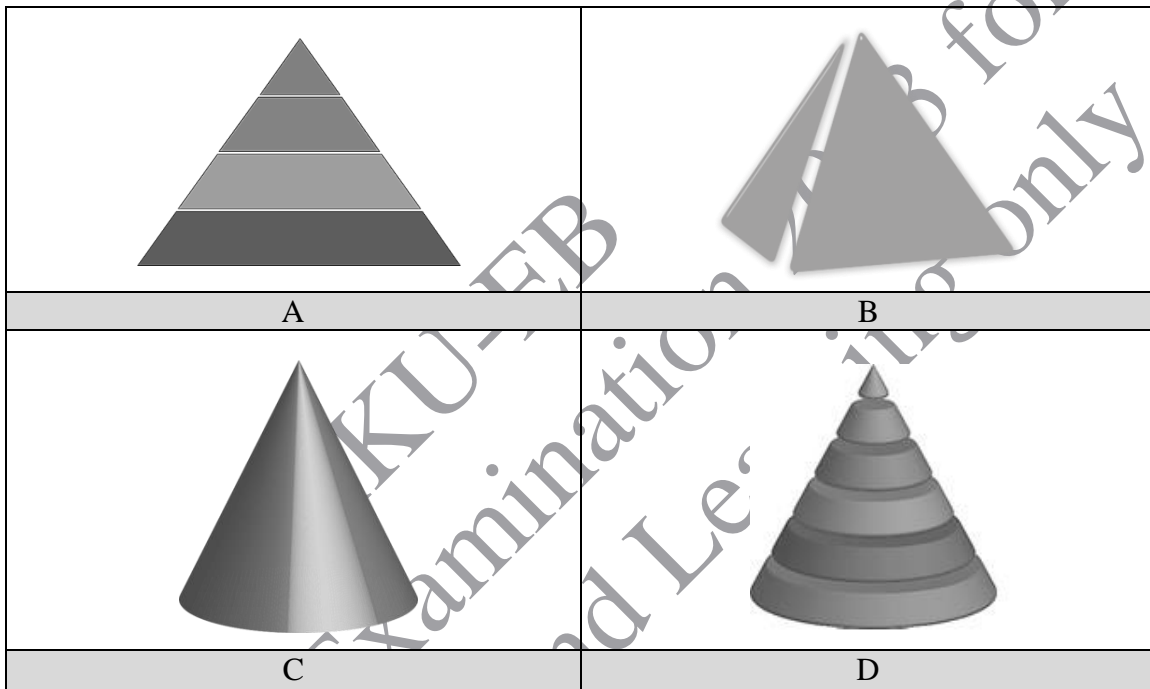
- A. rhythm.
 - B. balance.
 - C. emphasis.
 - D. proportion.
10. In contrast to decorative art, descriptive art is considered significant for its
- A. utility.
 - B. theme.
 - C. modern designs.
 - D. aesthetic qualities.

11. Which of the following options exemplifies hue?


- A. A shadow
- B. A shade card
- C. A colour wheel
- D. A light to bright colour

12. Talha has been given an assignment to draw a three-dimensional object with horizontal lines.

As per the elements of art, the image that Talha will MOST probably draw is



13. The given image exemplifies a pencil drawing.




This type of drawing is identified as

- A. tonal drawing.
- B. gesture drawing.
- C. contour drawing.
- D. detailed drawing.

14. The given painting is the artwork of



- A. Sadequain.
B. Shakir Ali.
C. Ismail Gulgee.
D. Abdur Rehman Chughtai.
15. One of the OLDEST medium of painting is
- A. ink.
B. charcoal.
C. oil paints.
D. pastel colours.
16. The given image depicts one of the types of calligraphy that is



- A. *Naqsh* and cursive.
B. *Kufic* and geometric.
C. *Diwani* and geometric.
D. *Nasta'aliq* and cursive.
17. All of the following forms of fine arts are found on the walls of Ajanta caves EXCEPT
- A. poetry.
B. painting.
C. sculpture.
D. architecture.

18. The given Mughal painting MAJORLY displays



- A. emotions.
B. spirituality.
C. relationships.
D. an environment.
19. The factor that makes the tomb of Quaid-e-Azam a unique piece of art is its
- A. size.
B. design.
C. location.
D. material.
20. It is important to appreciate the artwork of different artists because their contributions help us in various ways EXCEPT to
- A. enhance our creative thinking skills.
B. develop skills essential for communication.
C. improve ourselves socially and emotionally.
D. build our opinions influenced by their thinking.

Please use this page for rough work

AKU-EB
Annual Examination 2023 for
Teaching and Learning only

Please use this page for rough work

AKU-EB
Annual Examination 2023 for
Teaching and Learning only